








V. Match the coins with the correct coin banks:



VI. Circle the EVEN numbers:

0 1 2 3 4 5 6 7 8 9 10



VII. Subtract:

4	7	5	10
- 4	- 5	- 2	- 6
_____	_____	_____	_____
_____	_____	_____	_____

VIII. Circle the ODD numbers:

0 1 2 3 4 5 6 7 8 9 10

IX. Look at the clock and write the time:



\_\_\_\_\_

**Subject: ENVIRONMENTAL SCIENCE**

I. Write the names of five People who help us:

- a. \_\_\_\_\_ b. \_\_\_\_\_
- c. \_\_\_\_\_ d. \_\_\_\_\_
- e. \_\_\_\_\_

II. Write any two:

- 1. Summer clothes: a. \_\_\_\_\_ b. \_\_\_\_\_
- 2. Clothes for rainy season: a. \_\_\_\_\_ b. \_\_\_\_\_
- 3. Winter clothes: a. \_\_\_\_\_ b. \_\_\_\_\_

III. Identify the pictures and write the names of the festivals:



\_\_\_\_\_

\_\_\_\_\_



\_\_\_\_\_

\_\_\_\_\_

**IV. Matching:**

**Red**

**Frog**

**Orange**

**Rose**

**Green**

**Sunflower**

**Blue**

**Orange**

**Black**

**Fish**

**Yellow**

**Crow**

**V. Draw and colour:**

**Umbrella**

**Boat**



Subject: हिंदी (द्वितीय भाषा)

I. ट की बारहखड़ी लिखें:

त की बारहखड़ी लिखें:

II. वर्णों की सहायता से शब्दों को पूरा करें:

- |                          |                         |
|--------------------------|-------------------------|
| 1. अ च क ____ (र, न, इ ) | 2. क ____ ह ल (र, ख, ट) |
| 3. श ____ ग म (ल, ह, ण)  | 4. प न ____ ट (र, घ, त) |
| 5. न ह ____ (न, र, ठ)    | 6. ____ व न (फ़, स, ह)  |

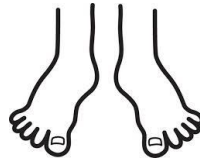
III. वर्णों को जोड़कर शब्द लिखिए:

- |                       |                       |
|-----------------------|-----------------------|
| उ + प + व + न = _____ | अ + ज + ग + र = _____ |
| म + ट + र = _____     | ब + र + त + न = _____ |
| ब + र + ग + द = _____ | ख + त = _____         |
| द + स = _____         | भ + व + न = _____     |

IV. चित्र पहचानकर सही वर्ण लिखें:



क \_\_\_\_ श



च र \_\_\_\_



प \_\_\_\_ क



श ल \_\_\_\_ म



\_\_\_\_ म



थ \_\_\_\_ म स

