



DELHI PUBLIC SCHOOL VISAKHAPATNAM
Revision Assignment 2022-23



Class: II

Name: _____, **Sec:** _____, **Roll No.** _____

Subject: ENGLISH

I Read the passage and answer the questions given below:

The milkman's cow was in a bad mood. It sat in the middle of the road and refused to move. The milkman begged the cow to get up. "The children are waiting for their milk to help them grow strong. Please get up," he pleaded. He pulled and tugged and prayed but the cow wasn't going anywhere that day. Along came a policeman, his buttons and buckles gleaming bright. "Humph," he said, twirling his long moustache. "I'll show you how to do it right." The policeman and the milkman pulled and tugged and prayed. But the cow wasn't going anywhere that day. Along came a grocer with bags of potatoes and peas. He said, "I'll move this cow with greatest of ease." The grocer, the policeman and the milkman pulled and tugged and prayed. But the cow wasn't going anywhere that day.

Q.1. Who was in a bad mood?

A.1 _____

Q.2. Where did it sit down?

A.2. _____

Q.3 Why did the cow refuse to get up?

A.3 _____


Q.4. What did the milkman do to make the cow move?

A.4. _____


Q.5 Who had a long moustache?

A.5. _____


II Fill in the blanks with correct prepositions:

1.  The teddy is _____ the box.

2.  The bird is _____ the boxes.

3.  The ball is _____ the box.

4.  The cat is _____ the table.

5.  The giraffe is _____ the table.

6.  The duck is _____ the table.

III] Fill in the blanks with correct conjunctions:

1. I bought cakes, candles _____ ice-creams.
2. She is poor _____ she is kind.
3. Do you prefer coffee _____ tea.
4. I love to eat pizza _____ burger.
5. Eagles fly alone _____ sheep flock together.
6. You must study, _____ you will fail.

Subject: Mathematics

I. Divide and write the Divisor, Dividend and Quotient.

$$12 \overline{) 96}$$

$$9 \overline{) 81}$$

$$14 \overline{) 42}$$

II Story sums (Do it in the note book)

a) John ,Rahul and Mary were each given a bit of rope.

John's rope was 2m 30 cm.

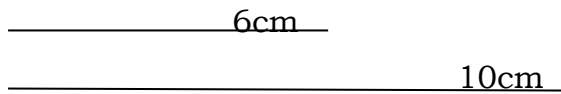
Rahul's rope was 3m 15 cm.and

Mary's rope was 1m 35cm.

Find out the measurement of all the ropes altogether .

b) Anita went to the market with her father. They bought 2Kg 200g of Oranges, 1Kg 400g of Biscuits and 450g of Cake. What is the total weight of the items bought by them ?

c) Find the difference between the measurements of the lines below.



Ans = _____

d) Anuja has rupees 20 ,Rita has rupees 100 and Tina has rupees 50.

i) Who has more money ?

ii) How much money do they have altogether ?

III Add

a) l ml	b) Kg g	c) m cm
5 450	3 900	6 90
+ 2 375	+ 2 520	+ 6 5
_____	_____	_____

IV Subtract

a) l ml	b) Kg g	c) m cm
3 530	2 335	5 12
- 2 250	- 0 430	- 3 10
_____	_____	_____
_____	_____	_____

V Convert

Into cm	Into m and cm
a) 5m = _____ cm	a) 650 m = _____ m _____ cm
b) 4m 25 cm = _____ cm	b) 732 m = _____ m _____ cm

Subject: ENVIRONMENTAL SCIENCE

I. Answer these:

Q1. What is pollution?

A1. _____

Q2. What is land pollution?

A2. _____

Q3. What causes air pollution?

A3. _____

Q4. When do people use an aeroplane?

A4. _____

Q5. Which animals are used as means of transport?

A5. _____

II. Collect and write the vehicle numbers of the following transport.

Vehicle type	Vehicle name (car/bike etc)	Vehicle number? (example: AP31DC1234)
Two wheeler		
Two wheeler		
Three wheeler		
Three wheeler		
Four wheeler		
Four wheeler		
Six to eight wheeler		
Six to eight wheeler		

III. Draw and color traffic lights. Write what they mean?

IV. Name any two:

1. Air transport: _____, _____.
2. Water transport: _____, _____.
3. Land transport: _____, _____.
4. Animals used as transport: _____, _____.

Subject: हिंदी (द्वितीय भाषा)

I. अपठित गद्यांश :

गद्यांश पढ़कर नीचे लिखे प्रश्नों के उत्तर दो :

दो सहेलियाँ थी रीमा और सीमा। दोनों एक साथ पढ़ती और खेलती थी। एक दिन दोनों घर जा रहीं थी कि दो कुत्ते लड़ते हुए उधर आ निकले। रीमा कुत्तों से बहुत डरती थी। वह कुत्तों को देखकर भागने लगी और ठोकर खा कर गिर पड़ी। उसकी टाँग से खून बहने लगा। सीमा दौड़कर उसके पास पहुँची। टाँग से खून बहता देख उसने तुरंत अपना , रूमाल घाव पर बाँध दिया और रीमा को सहारा देकर घर ले गई। रीमा की माँ उसे डॉक्टर के पास ले गई। डॉक्टर ने रीमा की चोट पर दवा लगाकर पट्टी बाँध दी। रीमा की माँ ने सीमा की बड़ी प्रशंसा की।

प्रश्न 1- दोनो सहेलियों का क्या नाम था ?

उत्तर - _____

प्रश्न 2- रीमा क्यों भागने लगी ?

उत्तर - _____

प्रश्न 3- रीमा की मा ने सीमा की प्रशंसा क्यों की ?

उत्तर - _____

प्रश्न 4- रीमा की टाँग से खून बहता देख सीमा ने क्या किया ?

उत्तर - _____


प्रश्न 5- गद्यांश देखकर वचन बदलो -

[क] सहेली - _____ [ख] कुत्ता - _____

II. महीनों के नाम लिखो :

III. १-२० तक गिनती लिखें :

IV. चित्र देख कर पाँच वाक्य लिखो :



Subject: తెలుగు (ద్వితీయ భాష)

1. గుణింతపు గుర్తులను వ్రాయుము .
2. ఒత్తులను వ్రాయుము .
3. ద్వితీయాక్షరాలు అనగానేమి.
4. సంయుక్తాక్షరాలు అనగానేమి.
5. సంశ్లేషాక్షరాలు అనగానేమి.
6. తిథుల పేర్లు వ్రాయుము.