



# **DELHI PUBLIC SCHOOL**

VISAKHAPATNAM STEEL PLANT

**ASSIGNMENT JUNE - JULY 2020**

**Class: II**

**Subject: ENGLISH**

## **I. Read the passage and answer the following questions .**

Every morning, the students gather at the quadrangle for the assembly. They start with a small prayer. Then, the principal gives his speech. He sometimes talks about the importance of keeping oneself and surroundings clean. He then calls some students on the stage. Few students discuss the topic and read the important news of that day. Finally, the students sing the National Anthem and they return to their classes.

Q.1. Where do the students gather for the assembly?

A. 1. \_\_\_\_\_

Q.2. Who gives the speech ?

A.2. \_\_\_\_\_

Q.3. What do the students do on the stage ?

A.3. \_\_\_\_\_

Q. 4. Find out **five** nouns from the passage and write them.

A. 4. \_\_\_\_\_

Q. 5. Search from the passage and write **five** verbs.

A. 5 . \_\_\_\_\_

## **II. Fill in the blanks with am / is / are / was / were .**

1. He \_\_\_\_\_ in the room now.

2. You \_\_\_\_\_ here at present .

3. Nita and Mita \_\_\_\_\_ my friends.

4. Sunil \_\_\_\_\_ ill last Sunday.

5. I \_\_\_\_\_ seven years old now.

6. We \_\_\_\_\_ in Delhi last week.

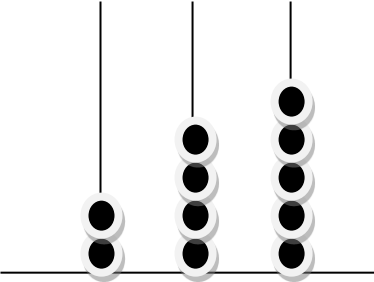
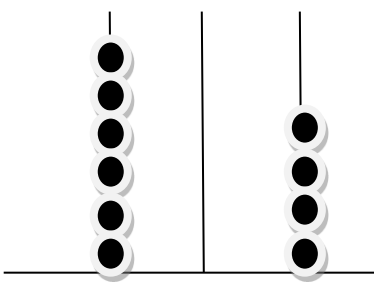
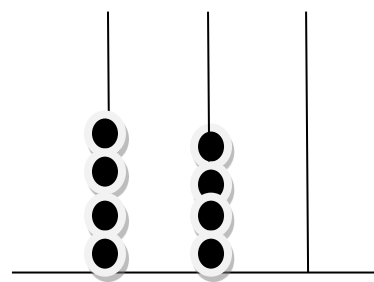
7. Today the weather \_\_\_\_\_ fine. But yesterday it \_\_\_\_\_ bad.

**III. Write the plural form of these words.**

- |                   |                  |
|-------------------|------------------|
| 1. Story - _____  | 2. Child - _____ |
| 2. House - _____  | 6. Dish - _____  |
| 3. Life - _____   | 7. Deer - _____  |
| 4. Potato - _____ | 8. Watch - _____ |
| 5. Candy - _____  | 10. Piece- _____ |

**Subject: MATHEMATICS**

**I. Write the numeral shown on each abacus:**

|  |   |   |   |  |   |   |   |  |   |   |   |
|--|---|---|---|--|---|---|---|--|---|---|---|
| a)   | H | T | O | b)   | H | T | O | c)   | H | T | O |
|  |   |   |   |  |   |   |   |  |   |   |   |
| <input type="text"/>   |   |   |   | <input type="text"/>   |   |   |   | <input type="text"/>   |   |   |   |

**II. Write the expanded form of the numeral :**

- a)  $678 =$    $+$    $+$
- b)  $908 =$    $+$    $+$
- c)  $560 =$    $+$    $+$

**III. Write the place value of these digits in the numeral :**

- a) 3 in 873 =
- b) 0 in 301 =
- c) 5 in 511 =

**IV. Fill in the correct symbol  $>$  or  $<$  :**

- |                                 |                                 |                                 |
|---------------------------------|---------------------------------|---------------------------------|
| a) 786 <input type="text"/> 812 | b) 108 <input type="text"/> 101 | c) 457 <input type="text"/> 498 |
| d) 117 <input type="text"/> 198 | e) 99 <input type="text"/> 999  | f) 765 <input type="text"/> 765 |

**V. Add :**

|    | H                    | T | O |
|----|----------------------|---|---|
| a) | 7                    | 8 | 9 |
| +  | 2                    | 1 | 0 |
|    | <input type="text"/> |   |   |
|    | H                    | T | O |

|    | H                    | T | O |
|----|----------------------|---|---|
| b) | 4                    | 3 | 8 |
| +  | 2                    | 5 | 9 |
|    | <input type="text"/> |   |   |
|    | H                    | T | O |

|    | H                    | T | O |
|----|----------------------|---|---|
| c) | 2                    | 6 | 9 |
| +  | 4                    | 7 | 5 |
|    | <input type="text"/> |   |   |

|    | H                    | T | O |
|----|----------------------|---|---|
| d) | 3                    | 2 | 1 |
|    | 1                    | 3 | 4 |
| +  | 2                    | 3 | 2 |
|    | <input type="text"/> |   |   |

|    | H                    | T | O |
|----|----------------------|---|---|
| e) | 5                    | 8 | 7 |
|    | 1                    | 4 | 6 |
| +  | 0                    | 2 | 8 |
|    | <input type="text"/> |   |   |

**VI. Write the number name :**

a) 876 - \_\_\_\_\_

b) 702 - \_\_\_\_\_

c) 120 - \_\_\_\_\_

**VII . Solve the story sums :**

1. Sam read 385 pages in science text book and 179 pages in maths text book. How many pages did he read altogether?

Ans.

---

---

---

---

2. Aman has 245 stickers and Balu has 463 stickers and Madu has 123 stickers. How many stickers did they have in all ?

Ans.

---

---

---

---

---

**Subject: ENVIRONMENTAL SCIENCE**

**I. Answer the following questions.**

1) What did early man wear?

Ans. \_\_\_\_\_

2) What is spinning?

Ans. \_\_\_\_\_

3) What is weaving?

Ans. \_\_\_\_\_

4) What is a very tall multi storied building called as?

Ans. \_\_\_\_\_

5) Why do stilt houses have sloping roofs?

Ans. \_\_\_\_\_

6) Which is your favorite period in the school?

Ans. \_\_\_\_\_

7) Why should we follow the traffic rules?

Ans. \_\_\_\_\_

8) What kind of clothes should you wear in a hill station?

Ans. \_\_\_\_\_

9) What is a dispensary?

Ans. \_\_\_\_\_

10) Where do you find houseboats in India?

Ans. \_\_\_\_\_

**Subject: HINDI**

**I. संज्ञा शब्दों पर गोला लगाओ।**

1. शेर पशुओं के राजा है।
2. मैं दूसरी कक्षा में पढ़ता हूँ।
3. मुझे सेब और अंगूर खाना पसंद है।
4. उसके पास एक नया किताब है।
5. तोता हरी मिर्च खाता है।

**II. नीचे लिखे शब्दों में से चार शब्द ढूँढो।**

1. नीलकमल - \_\_\_\_\_, \_\_\_\_\_, \_\_\_\_\_, \_\_\_\_\_
2. जलमहल - \_\_\_\_\_, \_\_\_\_\_, \_\_\_\_\_, \_\_\_\_\_

**III. दो-दो नाम लिखो।**

1. नदियाँ - \_\_\_\_\_
2. पहनने के कपड़े - \_\_\_\_\_
3. पीनेवाली चीजें - \_\_\_\_\_
4. खानेवाली चीजें - \_\_\_\_\_
5. स्थान - \_\_\_\_\_

**IV. सही शब्द भरकर कहानी को पूरा करो।**

[ घास, गधा, धोबी, कपड़े, नदी, खुश ]

रामू नाम का एक \_\_\_\_\_ था। उसके पास एक \_\_\_\_\_ था। वह गधे की पीठ पर \_\_\_\_\_ रखकर \_\_\_\_\_ पर धोने जाता था। वहीं गधा हरीहरी \_\_\_\_\_ खाता था। दोनों बहुत \_\_\_\_\_ थे।

**Subject: TELUGU**

1. గుణింతపుగుర్తులను వ్రాయుము .
2. ఒత్తులను వ్రాయుము .
3. రూపం మారే ఒత్తులను వ్రాయుము.
4. రూపం మారని ఒత్తులను వ్రాయుము .
5. క్రింది గుణింతపుగుర్తులతో 3 పదాలను వ్రాయుము .  
ఆ, ఇ, ఈ, ఊ, ఉ, ఋ, ఌ, ఏ, ఎ
6. క, గ, చ, జ, ట ఒత్తులతో 4 పదాలను వ్రాయుము.