



# **DELHI PUBLIC SCHOOL**

VISAKHAPATNAM STEEL PLANT

REVISION ASSIGNMENT 2020-21

Class: II

**Subject: ENGLISH**

**I. Complete the paragraph with and / or / but. Then answer the questions given below.**

Diya's favourite animals are leopards \_\_\_\_\_ rhinoceroses. Last Sunday, her father said that he could take her either to the zoo \_\_\_\_\_ the museum. Diya wanted to visit both, \_\_\_\_\_ her father said she had to choose one. Diya chose the zoo. At the zoo, the leopards were roaming \_\_\_\_\_ the rhinoceroses were sleeping. After visiting the zoo, Diya \_\_\_\_\_ her parents went to have burgers \_\_\_\_\_ milkshakes for lunch. While coming back, Diya said that the zoo was better than a film \_\_\_\_\_ a shopping mall.

Q.1. When did Diya visit the zoo?

A. 1. \_\_\_\_\_

Q.2. What were Diya's favourite animals doing in the zoo ?

A.2. \_\_\_\_\_

Q.3. What did she have as lunch on that day ?

A.3. \_\_\_\_\_

**II. Join the following sentences with proper conjunctions.( and/ or/but / so /because)**

1. He is poor . He is honest.

\_\_\_\_\_ .

2. The man is bold . The man is strong.

\_\_\_\_\_

3. I was tired. I went to home early.

\_\_\_\_\_

4. Do you prefer coffee? Do you prefer tea?

\_\_\_\_\_

5. Alia is happy. She won the race.

\_\_\_\_\_

# Subject: MATHEMATICS

## I. Multiply:

	H	T	O
a)		6	5
	x		8
	<input type="text"/>		

	H	T	O
b)	2	3	4
	x		2
	<input type="text"/>		

c)	4	5	
	x	4	0
	<input type="text"/>		

## II. Divide:

a)  $72 \div 9 =$

b)  $64 \div 8 =$

c)  $28 \div 7 =$

## III. Write two division facts :

a)  $8 \times 7 = 56$  \_\_\_\_\_, \_\_\_\_\_

b)  $6 \times 6 = 36$  \_\_\_\_\_, \_\_\_\_\_

c)  $9 \times 2 = 18$  \_\_\_\_\_, \_\_\_\_\_

## IV. Solve the story sums:

a) There are 36 pages in a notebook. How many pages will be there in such 6 notebooks?

Ans.

---

---

---

---

b) 63 girls are standing in 7 rows. The number of girls in each row is the same. How many girls are there in each row?

Ans.

---

---

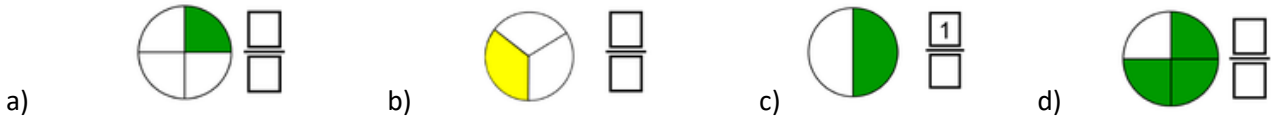
---

---

## V. Convert :


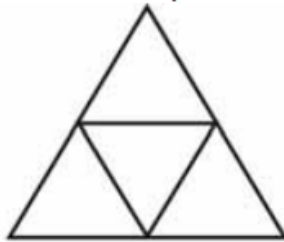
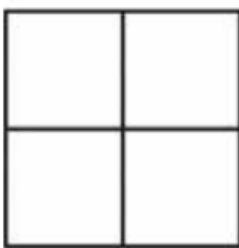
- a)  $3\ell =$  \_\_\_\_\_  $\text{ml}$     b)  $\text{₹}8 =$  \_\_\_\_\_  $\text{p}$     c)  $982 \text{ cm} =$  \_\_\_\_\_  $\text{m}$  \_\_\_\_\_  $\text{cm}$   
d)  $600 \text{ p} = \text{₹}$  \_\_\_\_\_    e)  $6\text{m } 78\text{cm} =$  \_\_\_\_\_  $\text{cm}$     f)  $5000 \text{ g} =$  \_\_\_\_\_  $\text{kg}$

## VI. Write the shaded fraction of each shape below :

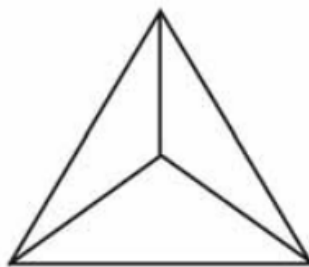


## VII


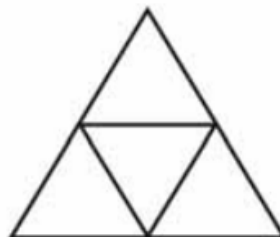

(1) Colour one fourth ( $1/4$ ) of each shape.



(2) Colour one third ( $1/3$ ) of each shape.



(3) Colour three fourth ( $3/4$ ) of each shape.



**Subject: ENVIRONMENTAL SCIENCE**

I) Answer the following questions.

1 What would happen if you left your toys on the floor?

---

2 What would happen if you climbed the windowsill?

---

3 Why should you not touch electric wires and plugs?

---

4 Name the three ways where you should cross the road.

---

5 How should you wait while waiting for a bus?

---

6 Which is the safest place for you to play?

---

7 What should you use when you are learning to swim?

---

8 Name three things a first aid box should contain.

---

II) Choose the correct answer.

1 You and your neighbor study in the same school. You should

a) share a vehicle to go to school.

b) go on your own vehicles.

2 You see an old man standing in the bus. You will

a) offer your seat.

b) ignore him.

3 You break a plate in the kitchen. You will

a) put the blame on someone else.

b) admit your mistake and say sorry.

4 You find children throwing stones at a stray dog. You will

a) ignore and walk away.

b) stop the act and speak to children.

5 Your friend gifts you firecrackers on Diwali. You will

a) return the gift.

b) You will burst them.

### **Subject: HINDI**

#### **I. इस अनुच्छेद को पढ़ो ।**

हर साल २६ जनवरी को हम सब गणतंत्र दिवस मनाते हैं । इस दिन हमारे देश के राष्ट्रपति तिरंगा फहराते हैं। दिल्ली के राजपथ में देश के सारे राज्य एक रंगबिरंगी प्रदर्शन निकालते हैं । हमारे स्थल और नौसेना अपने हथियार दिखाते हैं । हमारे वायु सेना अपने हवाई जहाजों के कलावाजियाँ दिखाते हैं ।

#### **इन प्रश्नों के उत्तर लिखो ।**

1. हम कब गणतंत्र दिवस मनाते हैं ?

---

2. गणतंत्र दिवस में कौन तिरंगा फहराते हैं?

---

3. दिल्ली के राजपथ में क्या निकलता है ?

---

4. हमारे वायु सेना क्या दिखाते हैं ?

---

## II. नीचे दिए गए शब्दों के लिए सही विशेषण लिखो ।

1. \_\_\_\_\_ शहद                      4. \_\_\_\_\_ तितली  
2. \_\_\_\_\_ पहाड़                      5. \_\_\_\_\_ सेब  
3. \_\_\_\_\_ चाय                      6. \_\_\_\_\_ घास

## III. मिलान करो ।

क	ख
१२	सात
१४	अठ्ठारह
५	तीन
९	पाँच
१८	नौ
३	बारह
७	चौदह

## Subject: TELUGU

1. మీకు తెలిసిన ఏవైనా 15 గుణింతపుగుర్తులతో మొదలయ్యే పదాలను వ్రాయుము .
2. ఒత్తులను వ్రాయుము .
3. మీకు తెలిసిన ఏవైనా 8 పూలు,పండ్లు,రంగులు,కూరకాయలు ,ఆకుకూరల పేర్లు వ్రాయుము.
4. 1 - 30 అంకెలను వ్రాయుము .
5. క్రింది అక్షరాలకు ఒత్తులను వ్రాసి ,వాటితో 3 పదాలను వ్రాయుము .  
క,చ,జ,డ,న,త,ల,వ,శ,మసా,య,ర
6. ఏవైనా 4 సంయుక్త,ద్విత్వ,సంశ్లేషాక్షరాలను వ్రాయుము .