



# **DELHI PUBLIC SCHOOL**

VISAKHAPATNAM STEEL PLANT

REVISION ASSIGNMENT 2019 - 20

Class: II

Subject: ENGLISH

## **Read the following paragraph and answer the questions**

The earth gets light from the sun. The earth is round. All parts of the sun cannot get light at the same time. When one side faces the sun, the other side is in darkness. The earth spins like a top from west to east. This movement is called the rotation of the earth. The earth takes twenty four hours to complete one rotation. The twenty four hours make one full day. We call the hours of light 'day' and the hours of darkness 'night'.

Q.1. Where from does the earth get light ?

A.1. \_\_\_\_\_

Q.2. Do all parts of the earth get light at a time ?

A.2. \_\_\_\_\_

Q3. What is called rotation ?

A.3. \_\_\_\_\_

Q4. How long does the earth take to complete a rotation ?

A.4. \_\_\_\_\_

## **Write the opposite of the following words.**

Light x \_\_\_\_\_ round x \_\_\_\_\_ complete x \_\_\_\_\_

## **II. Fill in the blanks with the correct form of the words given in the brackets.**

1. Apples are \_\_\_\_\_ than chips. (healthy)
2. Silver is \_\_\_\_\_ than gold. (cheap)
3. The weather is \_\_\_\_\_ than yesterday. (hot)
4. Elephants are \_\_\_\_\_ than bears. (big)
5. My bag is \_\_\_\_\_ than yours. (heavy)
6. This path is \_\_\_\_\_ than the other one. (narrow)

## **III. Fill in the blanks with has, have or had.**

1. Tonight, Anisha will \_\_\_\_\_ a birthday party.
2. A rabbit \_\_\_\_\_ long ears.
3. Tigers \_\_\_\_\_ stripes on their body.
4. She \_\_\_\_\_ only ten minutes to complete her work.
5. You \_\_\_\_\_ curly and long hair.
6. Last week, Virat \_\_\_\_\_ fever and missed the school.

**Subject: MATHEMATICS**

**I. Add :**

a) m                      cm  
 4 5                      9 5  
 + 1 3                      8 0  
 \_\_\_\_\_

b) kg                      g  
 9                      6 8 0  
 + 8                      7 0 0  
 \_\_\_\_\_

c) l                      ml  
 7                      7 7 0  
 + 2                      2 5 0  
 \_\_\_\_\_

**II. Subtract:**

a) m                      cm  
 5 9                      8 0  
 - 1 6                      4 3  
 \_\_\_\_\_

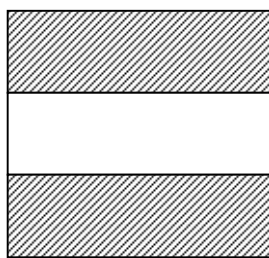
b) kg                      g  
 8                      9 0 0  
 - 6                      2 5 5  
 \_\_\_\_\_

c) l                      ml  
 4 5                      8 4 0  
 - 2 0                      2 7 0  
 \_\_\_\_\_

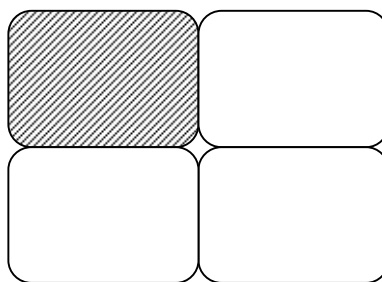
**III. Write the unit you will use to measure the following:**

1. Length of your brush - \_\_\_\_\_
2. Weight of your water bottle - \_\_\_\_\_
3. Capacity of oil tin - \_\_\_\_\_
4. Weight of your school bag - \_\_\_\_\_
5. Weight of a toffee - \_\_\_\_\_
6. Distance from visakhapatnam to Chennai - \_\_\_\_\_
7. Length of a chalk - \_\_\_\_\_
8. Weight of an orange - \_\_\_\_\_
9. Capacity of a juice in a jar - \_\_\_\_\_
10. Capacity of bottle of cough syrup - \_\_\_\_\_

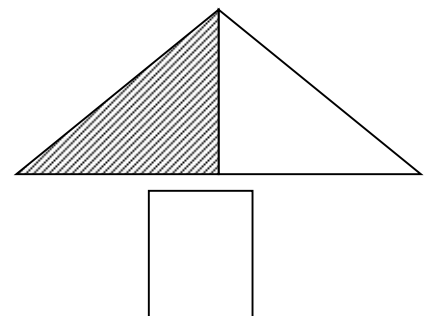
**IV. What fraction of each has been shaded:**




\_\_\_\_\_



\_\_\_\_\_



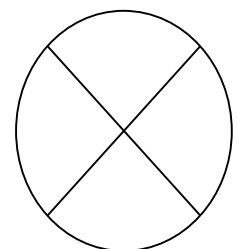
**V. Shade to show the fraction written below each figure:**



$\frac{3}{5}$



$\frac{4}{6}$



$\frac{1}{4}$

**VI. Solve the story sums:**

1. A rope of length 750m is joined to another rope of length 250m . What is the total length of rope now?

Ans.

---

---

---

---

2. A jug has 2l of water. 500ml of water is poured out. How much water is left in the jug now?

Ans.

---

---

---

---

3. Mala's weight is 56kg 220g, Bala weight is 28kg 330g. Who weighs more and by how much?

Ans.

---

---

---

---

**Subject: ENVIRONMENTAL SCIENCE**

**I) Answer the following questions.**

1. How did the early men communicate with each other when they did not use any language ?

a) \_\_\_\_\_

b) \_\_\_\_\_

2. Who carried the messages in olden times ?

---

3. How can you speak to someone who is walking far away on the road ?

---

4. What is the written message called that we send through a mobile phone ?

---

5. What is the written message called that we send through a Computer ?

---

6. Name a means of mass communication through which we can only listen to news and other programmes.

\_\_\_\_\_

7. Name a means of mass communication through which we can see and listen to news and other programmes?

\_\_\_\_\_

8. Name three means of mass communication which we can read?

\_\_\_\_\_

9. How would you communicate the following by using sign language ?

a) "yes" or "no" \_\_\_\_\_

b) "good bye" \_\_\_\_\_

c) "stop" \_\_\_\_\_

10. Name the animals with their calls.

a) "Neigh" \_\_\_\_\_

b) "Buzz" \_\_\_\_\_

c) "Hiss" \_\_\_\_\_

d) "Hoot" \_\_\_\_\_

e) "Bray" \_\_\_\_\_

f) "Chatter" \_\_\_\_\_

g) "caw" \_\_\_\_\_

h) "Roar" \_\_\_\_\_

i) "moo" \_\_\_\_\_

j) "mew" \_\_\_\_\_

**Subject: HINDI**

**मेरा परिचय**

1. मेरा नाम \_\_\_\_\_ है।

2. मैं \_\_\_\_\_ स्कूल में पढ़ता हूँ।

3. मैं \_\_\_\_\_ कक्षा का विद्यार्थी हूँ।

4. मेरे पिता का नाम \_\_\_\_\_ माता का नाम \_\_\_\_\_ है।

5. मुझे \_\_\_\_\_ खेलना बहुत अच्छा लगता है ।
6. \_\_\_\_\_ में मेरी बहुत रुचि है ।
7. मैं बड़ा होकर \_\_\_\_\_ बनना चाहता हूँ ।

**मैं मोर हूँ.....।**

1. मैं एक \_\_\_\_\_ हूँ।
2. मुझे \_\_\_\_\_ कहते हैं ।
3. मैं बहुत \_\_\_\_\_ हूँ।
4. वर्षा होने पर मैं पंख फैलाकर \_\_\_\_\_ लगता हूँ।
5. मेरे सिर पर लगी \_\_\_\_\_ राजा के मुकुट जैसी दिखती है ।
6. मैं भारत का \_\_\_\_\_ पक्षी हूँ।

**Subject: TELUGU**

1. ఆంధ్ర నెలల పేర్లు , తెలుగు నెలల పేర్లు నేర్చుకొనుము.
2. వర్షమాల వ్రాయుము..
3. ఒత్తులను వ్రాయుము .
4. క్రింది ఒత్తులతో 3 పదాలను వ్రాయుము .  
క,చ,త,స ప , బ , మ , త,ద, న, య, ర, ల, వ,
5. 1 నుండి 30 అంకెలను వ్రాయుము .
6. గుణింతపుగుర్తులను వ్రాయుము
7. పక్షుల,జంతువుల,కూరగాయల ,పూల,పండ్ల పేర్లు ఏవైనా 5 వ్రాయుము
8. ద్విత్వాక్షరము,సయుక్తాక్షరము,సంశ్లేషాక్షరములు అనగానేమి వ్రాయుము.